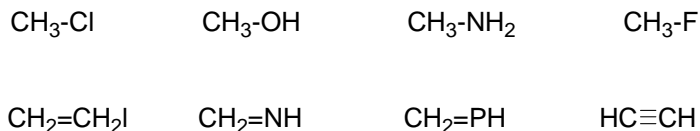


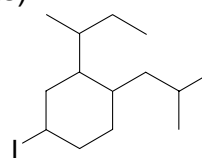
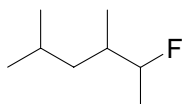
Quiz #3

March 10th, 2008

1) Rank the strength of the following bonds. (4 points)



2) Provide the name for the following structures (4 points).



3) Draw the energetic profile for an SN1 reaction and clearly indicate the starting materials, transition state and products. (4 points)

4) Which one of the following pair SN2 reactions runs faster? (3 points)

