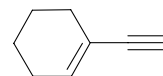
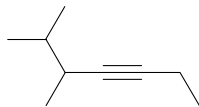
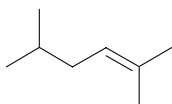


Practice Quiz #5

April 21st, 2008

2) Provide the name for the following structures (3 points).



1) Complete the following reactions by provide the missing starting materials, reaction conditions and products. (12 points)

